

Grade 3 - Day #8 e-Learning Schedule

Self-Selected Reading 20 minutes	Students should select a book from home, the library, or their take home reading and read for 20 minutes independently or with an adult.
--	--

Reading	Complete pages 130 and 131
----------------	----------------------------

Language/Spelling	Complete page 58 - following directions
--------------------------	---

Math	<ol style="list-style-type: none">1. Addition/subtraction sheet - 25 addition/subtraction problems2. Complete pages 50 and 51
-------------	--

Time spent on eLearning today: _____

Parent Signature: _____

Name _____

Drawing Conclusions

Directions: Read each riddle. Find the right answer in the list. Write it on the line. (You will not use all of the answers.)

- A. This looks like the measles,
But that's not it at all.
You have red spots all over,
And mostly they're small.
It sounds like a hen
May have given its name.
No one is quite sure
Who we really can blame!

It is _____

- B. Mom says she hates to do this.
Dad doesn't do it well.
One time he ruined his best shirt.
I am learning to do it with handkerchiefs.
Our shirts do look neater after someone does
this.


It is _____

- C. This job is quite hard. To do this a person
must be strong and brave. This person must
know how to keep people safe. It can be
dangerous at times. A person who has this job
must be ready to go when the alarm rings.

This person is a

Answers

laundry
fire fighter
Chicken Little
ironing
rash
weight lifter
chicken pox
doctor



Name _____

Drawing Conclusions

Directions: Read each riddle. Find the right answer in the list. Write it on the line. (You will not use all of the answers.)

- A. This can look like a box,
Or it might not at all.
It can be very large,
Or it may be quite small.
You can use buttons or dials
To find music or news.
It can be loud or soft,
Whatever you choose.

It is a _____

Answers

radio
party
milkshake
present
breakfast
carton
circus
movie

- B. Everything is ready.
Friends are coming.
The food has been prepared.
Invitations have been sent in the mail.
Balloons hang from the ceiling.

It is a _____

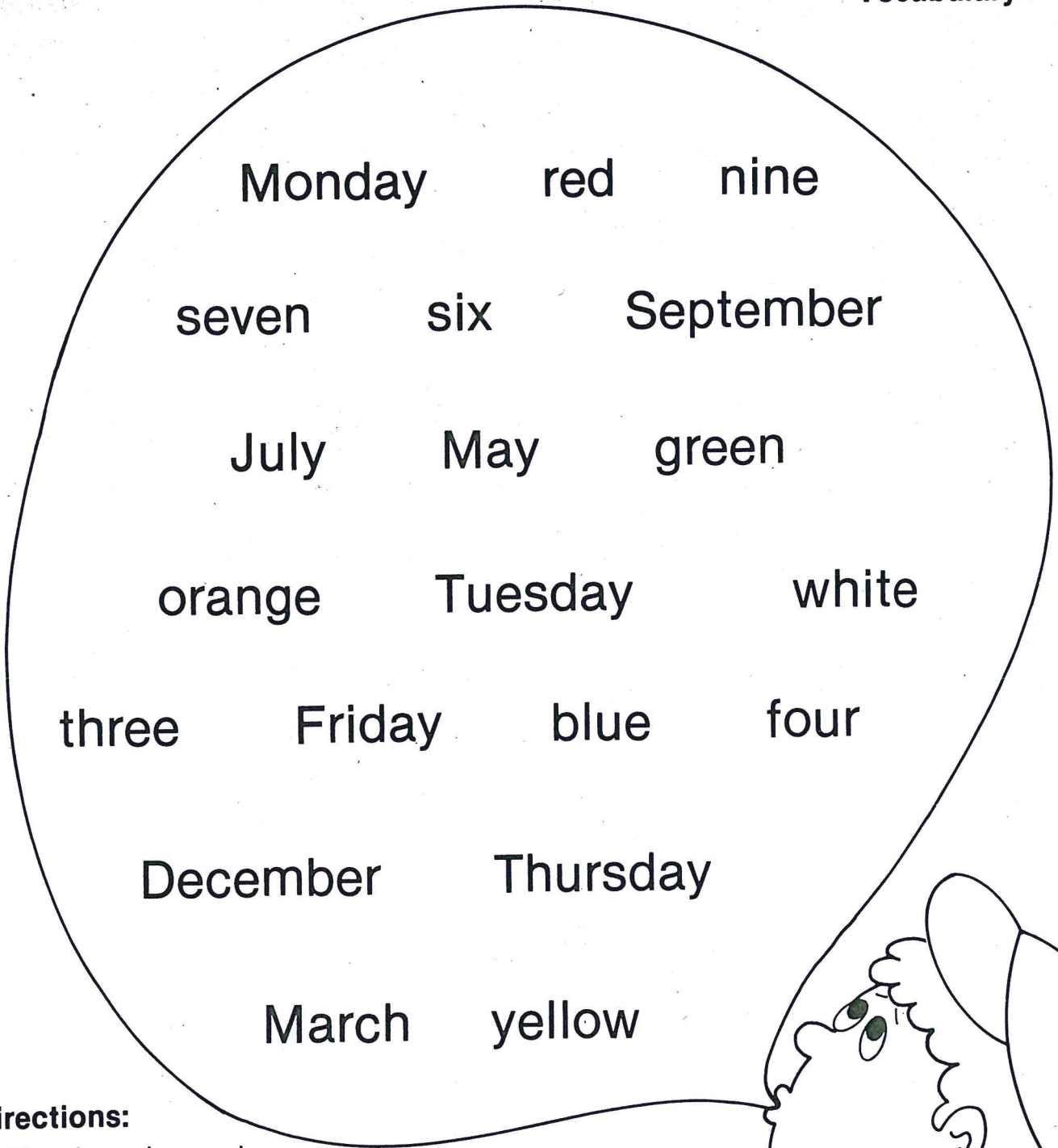


- C. Pam always looked forward to this. Her mom really knew how to make it special. She got up at dawn. It often took her a long time to prepare this. Sometimes there were scrambled eggs. It was Pam's favorite meal of the day.

It was _____

Name _____

**Following Directions
Vocabulary**



Directions:

1. Read each word.
2. Draw a green triangle around each color word.
3. Underline a summer month in purple.
4. Draw a red circle around each number word.
5. Color the boy's hat yellow.
6. Draw a small orange star under each day of the week.
7. Count the words in the bubble. Write the number on the back of your paper.



Name:

Date:

$$\begin{array}{r} 8 \\ + 8 \\ \hline \end{array}$$

$$\begin{array}{r} 2 \\ - 1 \\ \hline \end{array}$$

$$\begin{array}{r} 3 \\ - 3 \\ \hline \end{array}$$

$$\begin{array}{r} 7 \\ - 3 \\ \hline \end{array}$$

$$\begin{array}{r} 1 \\ + 9 \\ \hline \end{array}$$

$$\begin{array}{r} 8 \\ + 4 \\ \hline \end{array}$$

$$\begin{array}{r} 2 \\ + 4 \\ \hline \end{array}$$

$$\begin{array}{r} 15 \\ + 6 \\ \hline \end{array}$$

$$\begin{array}{r} 1 \\ - 1 \\ \hline \end{array}$$

$$\begin{array}{r} 9 \\ + 1 \\ \hline \end{array}$$

$$\begin{array}{r} 6 \\ - 3 \\ \hline \end{array}$$

$$\begin{array}{r} 5 \\ + 4 \\ \hline \end{array}$$

$$\begin{array}{r} 5 \\ + 5 \\ \hline \end{array}$$

$$\begin{array}{r} 8 \\ + 2 \\ \hline \end{array}$$

$$\begin{array}{r} 7 \\ + 5 \\ \hline \end{array}$$

$$\begin{array}{r} 4 \\ + 6 \\ \hline \end{array}$$

$$\begin{array}{r} 8 \\ + 5 \\ \hline \end{array}$$

$$\begin{array}{r} 12 \\ - 9 \\ \hline \end{array}$$

$$\begin{array}{r} 13 \\ - 7 \\ \hline \end{array}$$

$$\begin{array}{r} 4 \\ + 8 \\ \hline \end{array}$$

$$\begin{array}{r} 8 \\ - 5 \\ \hline \end{array}$$

$$\begin{array}{r} 7 \\ - 3 \\ \hline \end{array}$$

$$\begin{array}{r} 10 \\ - 6 \\ \hline \end{array}$$

$$\begin{array}{r} 4 \\ - 4 \\ \hline \end{array}$$

$$\begin{array}{r} 9 \\ - 8 \\ \hline \end{array}$$

Unit 2 Review

Add.

$6 + 2 = \underline{\quad}$

$4 + 5 = \underline{\quad}$

$9 + 7 = \underline{\quad}$

$8 + 6 = \underline{\quad}$

$0 + 10 = \underline{\quad}$

$9 + 9 = \underline{\quad}$

$8 + 8 = \underline{\quad}$

$3 + 9 = \underline{\quad}$

$$\begin{array}{r} 16 \\ + 3 \\ \hline \end{array}$$

$$\begin{array}{r} 25 \\ + 41 \\ \hline \end{array}$$

$$\begin{array}{r} 32 \\ + 62 \\ \hline \end{array}$$

$$\begin{array}{r} 18 \\ + 51 \\ \hline \end{array}$$

$$\begin{array}{r} 30 \\ + 9 \\ \hline \end{array}$$

$$\begin{array}{r} 47 \\ + 11 \\ \hline \end{array}$$

$$\begin{array}{r} 35 \\ + 23 \\ \hline \end{array}$$

$$\begin{array}{r} 83 \\ + 14 \\ \hline \end{array}$$

$$\begin{array}{r} 403 \\ + 163 \\ \hline \end{array}$$

$$\begin{array}{r} 521 \\ + 140 \\ \hline \end{array}$$

$$\begin{array}{r} 632 \\ + 305 \\ \hline \end{array}$$

$$\begin{array}{r} 285 \\ + 214 \\ \hline \end{array}$$

$$\begin{array}{r} \square \\ 15 \\ + 6 \\ \hline \end{array}$$

$$\begin{array}{r} \square \\ 38 \\ + 35 \\ \hline \end{array}$$

$$\begin{array}{r} \square \\ 29 \\ + 18 \\ \hline \end{array}$$

$$\begin{array}{r} \square \\ 37 \\ + 24 \\ \hline \end{array}$$

$$\begin{array}{r} \square \\ 58 \\ + 17 \\ \hline \end{array}$$

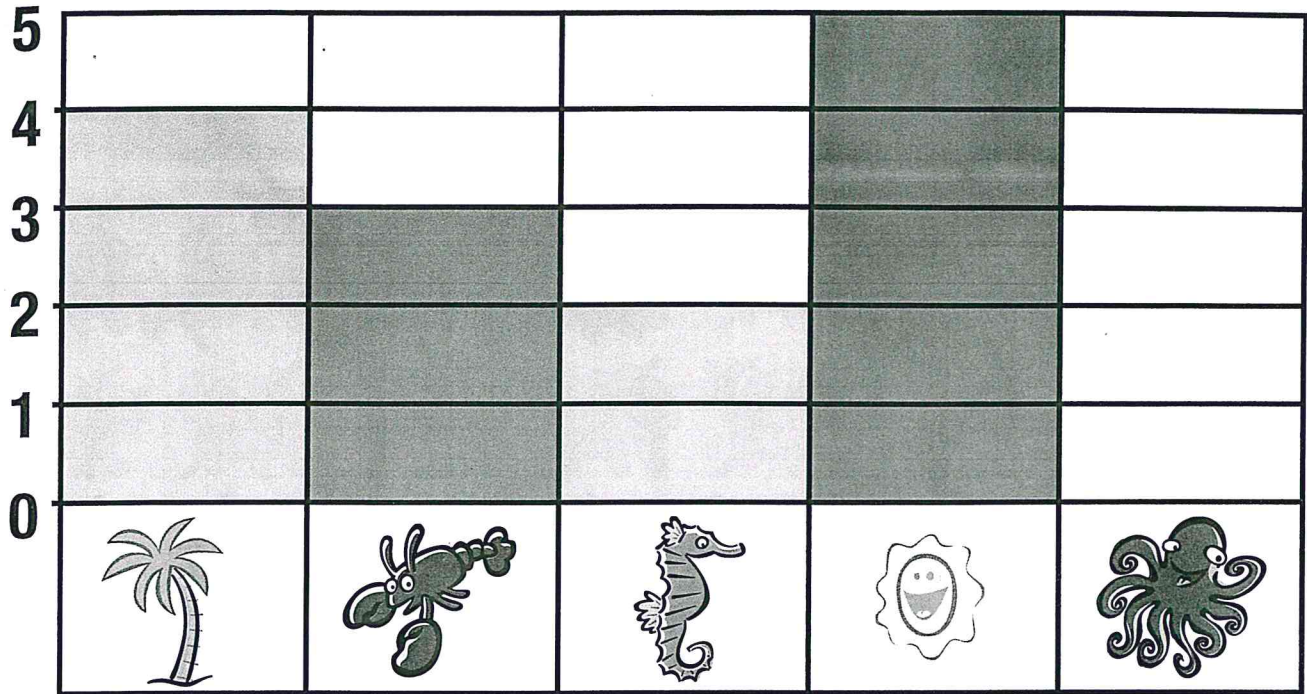
$$\begin{array}{r} \square \\ 29 \\ + 29 \\ \hline \end{array}$$

$$\begin{array}{r} \square \\ 88 \\ + 6 \\ \hline \end{array}$$

$$\begin{array}{r} \square \\ 45 \\ + 38 \\ \hline \end{array}$$

Unit 2 Review

Find the number of each object on the graph.
Then write the sums.



$$\underline{\quad} + 19 = \underline{\quad}$$



$$\underline{\quad} + 23 = \underline{\quad}$$



$$\underline{\quad} + 48 = \underline{\quad}$$



$$\underline{\quad} + 71 = \underline{\quad}$$

Circle the best estimate for each sum.

$$43 + 18$$



$$\underline{\quad} + \underline{\quad}$$

50

60

70

$$29 + 54$$



$$\underline{\quad} + \underline{\quad}$$

60

70

80