

Grade 3 - Day #9 e-Learning Schedule

Self-Selected Reading 20 minutes	Students should select a book from home, the library, or their take home reading and read for 20 minutes independently or with an adult.
--	--

Reading	Drawing Conclusions - p 116-117
----------------	---------------------------------

Language/Spelling	Write your spelling words 3 times each. Use crayons, markers, colored pencils, or pens to write your words.
--------------------------	---

Math	*25 addition problems *p. 68-69 Daily math - do all *p. 66 Daily word problems - do both
-------------	--

Time spent on eLearning today: _____

Parent Signature: _____

Name _____

Drawing Conclusions

Directions: Read each riddle. Find the right answer in the list. Write it on the line. (You will not use all of the answers.)

- A. They were people who lived here
A long time ago.
They fished and they hunted
The wild buffalo.
Proud were these people
Who lived on the plains.
Their lives became different
With the coming of trains.

They were _____

- B. Most families have one of
these.
This thing does a special job.
Sometimes it makes something
very light.
Sometimes it makes something
very dark.
Most people use this to help make
breakfast.

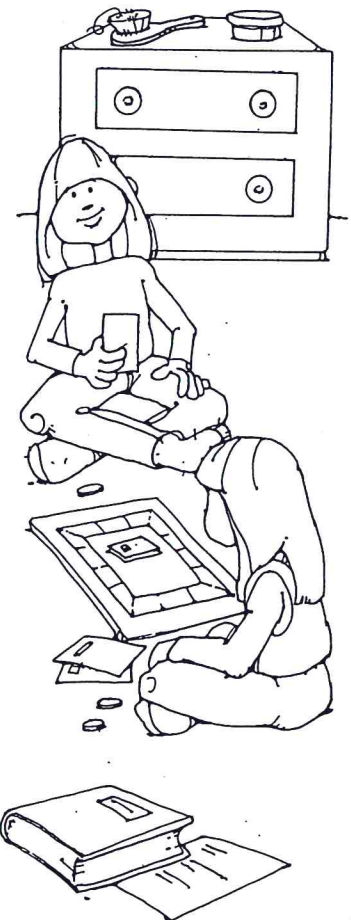
It is a _____

- C. Some people have one of their own. Some
share theirs with someone. It is a place for
special things. It can be a good place to be
alone. This might be a nice place to read.
There's no better place to spend the night.

It is a _____

Answers

pirates
toaster
washing machine
Indians
library
can opener
Pilgrims
bedroom



Name _____

Drawing Conclusions

Directions: Read each riddle. Find the right answer in the list. Write it on the line. (You will not use all of the answers.)

Answers

sandwich

garden

elephant

tractor

pumpkin

rope

squash

pie

- A. A farmer might use this
To pull a big wagon,
Or any large thing
That he's thinking of draggin'.
It has four tires,
Two large and two small.
It helps to get work done.
That's the best part of all!


- - - - -
It is a _____

- B. Almost everyone likes this.
You can make your own or go out
to buy one.
The two pieces on the outside can
be any kind you like.
The filling is up to you, too!
Peanut butter and jelly is a good one!

- - - - -
It is a _____

- C. What a mess! Emily is up to her elbows in
goo! Her mom helped her do the cutting. Now
Emily's job is to clean out the inside. Seeds and
pulp are everywhere! Emily and her mom are
laughing. Soon they will cut out the face.

- - - - -
It is a _____



Name: _____

$$\begin{array}{r} 3 \\ +6 \\ \hline \end{array}$$

$$\begin{array}{r} 3 \\ +4 \\ \hline \end{array}$$

$$\begin{array}{r} 1 \\ +8 \\ \hline \end{array}$$

$$\begin{array}{r} 8 \\ +3 \\ \hline \end{array}$$

$$\begin{array}{r} 1 \\ +1 \\ \hline \end{array}$$

$$\begin{array}{r} 9 \\ +5 \\ \hline \end{array}$$

$$\begin{array}{r} 9 \\ +4 \\ \hline \end{array}$$

$$\begin{array}{r} 2 \\ +2 \\ \hline \end{array}$$

$$\begin{array}{r} 2 \\ +4 \\ \hline \end{array}$$

$$\begin{array}{r} 3 \\ +8 \\ \hline \end{array}$$

$$\begin{array}{r} 7 \\ +5 \\ \hline \end{array}$$

$$\begin{array}{r} 9 \\ +6 \\ \hline \end{array}$$

$$\begin{array}{r} 2 \\ +7 \\ \hline \end{array}$$

$$\begin{array}{r} 8 \\ +2 \\ \hline \end{array}$$

$$\begin{array}{r} 5 \\ +4 \\ \hline \end{array}$$

$$\begin{array}{r} 2 \\ +1 \\ \hline \end{array}$$

$$\begin{array}{r} 8 \\ +1 \\ \hline \end{array}$$

$$\begin{array}{r} 6 \\ +7 \\ \hline \end{array}$$

$$\begin{array}{r} 8 \\ +6 \\ \hline \end{array}$$

$$\begin{array}{r} 8 \\ +9 \\ \hline \end{array}$$

$$\begin{array}{r} 1 \\ +5 \\ \hline \end{array}$$

$$\begin{array}{r} 9 \\ +3 \\ \hline \end{array}$$

$$\begin{array}{r} 5 \\ +7 \\ \hline \end{array}$$

$$\begin{array}{r} 9 \\ +2 \\ \hline \end{array}$$

$$\begin{array}{r} 7 \\ +1 \\ \hline \end{array}$$

1. $18 - 6 - 3 = \underline{\hspace{2cm}}$

4. $100 + 0 = 100$, so

$100 - \square = 100$

2.
$$\begin{array}{r} 164 \\ + 230 \\ \hline \end{array}$$

3. What time is it?



_____ :

_____ ¢

5. Julie spent 20¢, Joe spent 25¢, and Bill spent 32¢. How much did they spend altogether?

1. $9 + 6 + 3 = \underline{\hspace{2cm}}$

4. $12 \square 3 = 9$

2.
$$\begin{array}{r} 158 \\ - 114 \\ \hline \end{array}$$

3. $6 + 9 = 15$, so


$9 + 6 = \square$

5. Eight books were on the bottom shelf. Five books were on the second shelf. Four books were on the top shelf. How many books were there in all?

_____ books

Daily Word Problems

Monday-Week 22



There was a big sign by the apple farm. The sign said "You pick, \$2.00 a basket - We pick, \$3.00 a basket."

If I picked three baskets of apples, what would I pay?

Name:


Work Space:

Answer:

\$ _____

Daily Word Problems

Tuesday-Week 22



Max and Terry went to pick apples. Max picked one dozen apples. Terry picked two dozen apples.

How many apples did they pick in all?

Name:

Work Space:

Answer:

_____ apples