


Day 3



E-learning

I completed:

_____ The Five a Day page

_____ The Reading Passage and questions

_____ Math Work

_____ Writing

And 1 of the Following:

_____ Music activity

_____ Art activity

_____ P.E. activity

Please bring this completed packet to school when returning after an e-learning day.

NAME _____ DATE _____

Name _____

Day 3

Practice 125



Five-a-Day: Add and Subtract to 14

<p>Circle the 4th star.</p> <p>☆☆☆☆☆☆☆☆</p>	<p>Circle the 7th letter.</p> <p>AAAAAAAAAA</p>	<p>Circle the 1st number.</p> <p>8888888888888888</p>
<p>Farmer Ada had 14 animals. If 8 of them were chickens, how many were not chickens?</p> <p>_____ animals were not chickens.</p>	<p>Farmer Cary feeds the cows 9 bales of hay. He feeds the horses 4 bales of hay. How many more bales of hay does he give to the cows than to the horses?</p> <p>He gives the cows _____ more bales of hay.</p>	

Sentence-a-Day

i likes the sheeps best

A plural noun means that there is more than one person, place, or thing. Draw a line to match each picture to its name.



men

geese

children

mice

women



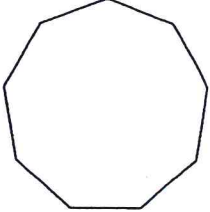
people

Name _____

Evad

Practice 147

Five-a-Day: Geometry, Patterns, and Shapes

<p>Count the corners.</p> <div style="text-align: center; margin: 10px 0;">  </div> <p>_____ corners</p>	<p>Count the corners.</p> <div style="text-align: center; margin: 10px 0;">  </div> <p>_____ corners</p>	<p>Count the corners.</p> <div style="text-align: center; margin: 10px 0;">  </div> <p>_____ corners</p>
<p>Make a shape that has exactly 6 corners.</p> 	<p>Make a shape that does not have any corners.</p> 	

Sentence-a-Day

a square have four sides

Find each hidden word. Color in each word.

C	I	R	C	L	E	U	D	O	W
D	I	A	M	O	N	D	X	P	S
B	R	Z	R	H	O	M	B	U	S
H	E	X	A	G	O	N	I	O	H
E	C	T	R	I	A	N	G	L	E
C	O	R	N	E	R	S	W	W	T
E	I	S	H	A	P	E	S	C	B
Q	R	E	C	T	A	N	G	L	E
V	S	Q	U	A	R	E	O	L	K
S	I	D	E	S	O	V	A	L	H

1. circle
2. corners
3. diamond
4. hexagon
5. oval
6. rectangle
7. rhombus
8. shapes
9. sides
10. square
11. triangle

Pig, Hen and Chicks



Tim has a big hen and little chicks.

Tim fed the hen and chicks.

Tim fed the hen and chicks in this pen.

The pig ran to the hen and chicks.

The hen and chicks ran and ran.

Tim ran fast after the pig.

The pig ran and ran.

The pig ran past the chicks and hen.

Tim has the hen and chicks.

Tim has the hen and chicks in the pen.

The hen and her chicks nap.




Dad ran after the pig.

Dad has the pig in a sack.

Dad fed the pig in the sack.

The pig naps.

Tim and Dad nap.



Name



READING CHALLENGE

After reading "Pig, Hen and Chicks," answer the following questions.

1. Who has a hen and chicks? _____
2. What is something you feed hen and chicks? _____

3. Who is being bad in this story and why? _____

4. Where did Tim put the hen and chicks? _____

5. Cross out the word in each row that does not belong.

<u>A.</u>	<u>B.</u>	<u>C.</u>	<u>D.</u>
pig	book	ran	little
hen	Tim	sack	big
pen	dad	walk	huge
chicks	mom	jump	giant

6. In the first line of the story which two words are opposites?
_____ and _____
7. Why did Dad, Tim, pig, hen and the chicks need to nap? _____

8. What two words in the story rhyme with ten? _____ and _____

Total Correct _____

Order Up!

Write the missing numbers. (Hint: Count down for some sets.)

1. 86 87 _____ 90 _____ 93 _____

2. _____ 55 _____ 52 _____

3. 74 _____ 76 _____ 80

4. 71 _____ 69 68 _____

Now **follow** the directions below.

For each number series, **circle** the greatest number. **Draw** an X on the smallest number.

Bonus Box: On the back of this sheet, write the following numbers in order from least to greatest: 82, 57, 100, 86, 60, 75, 93.


Daily Word Problems

Monday, Week 7

Name: _____

Each mouse had two pieces of cheese.

If there were four mice, how many pieces of cheese were there?



Write a number sentence here.

_____ pieces


Daily Word Problems

Tuesday, Week 7

Name: _____


Dave trapped one mouse every day for two weeks.

How many mice did he trap?

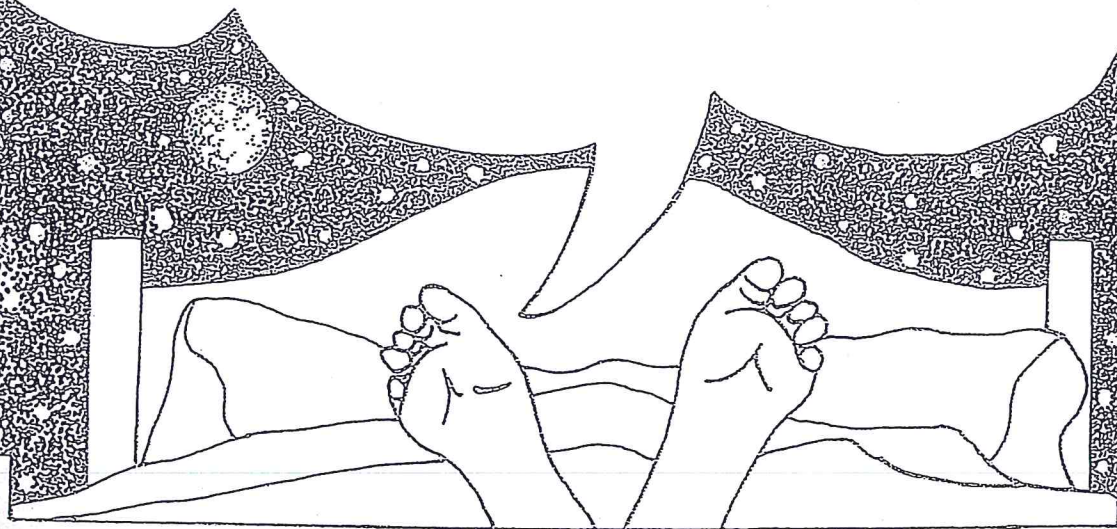


Write a number sentence here.

_____ mice



Draw the worst nightmare you ever had.



What was the nicest dream you ever had?

