

## Grade 2 - Day #12 e-Learning Schedule

<b>Self-Selected Reading</b> 20 minutes	Students should select a book from home, the library, or their take home reading and read for 20 minutes independently or with an adult.
<b>Reading Literature/Informational Text</b> 20 minutes	Complete pages 180 and 227
<b>Writing/Spelling</b> 15 minutes	Rainbow write your spelling words. Write each word in a different color. You can use markers, crayons, or colored pencils.
<b>Math</b> 15 minutes	-Complete the addition fact sheet -Complete R5.2 and P5.2


Total estimated time: 70 minutes

Parent Signature: \_\_\_\_\_

Name \_\_\_\_\_

# Short Vowel Review

Read the incomplete words on the fire hydrant. Fill in the vowel a, e, i, o or u to complete each word.





Y as a Vowel

Read the words below. Decide if y has a long e sound or a long i sound. Print the words on the correct leaf.

fly  
my  
sky  
candy  
dry  
happy

long e

long i



penny

cry

funny

try  
bunny  
sunny

Name \_\_\_\_\_

This image shows a sheet of primary writing paper. It features 12 sets of horizontal lines. Each set consists of three lines: a solid top line, a dashed middle line, and a solid bottom line. These lines are evenly spaced and run across the width of the page, providing a guide for letter height and placement.

Name: \_\_\_\_\_

---

$$\begin{array}{r} 8 \\ +9 \\ \hline \end{array}$$

$$\begin{array}{r} 3 \\ +4 \\ \hline \end{array}$$

$$\begin{array}{r} 9 \\ +1 \\ \hline \end{array}$$

$$\begin{array}{r} 5 \\ +2 \\ \hline \end{array}$$

$$\begin{array}{r} 7 \\ +1 \\ \hline \end{array}$$

$$\begin{array}{r} 7 \\ +8 \\ \hline \end{array}$$

$$\begin{array}{r} 7 \\ +2 \\ \hline \end{array}$$

$$\begin{array}{r} 3 \\ +5 \\ \hline \end{array}$$

$$\begin{array}{r} 3 \\ +7 \\ \hline \end{array}$$

$$\begin{array}{r} 2 \\ +4 \\ \hline \end{array}$$

$$\begin{array}{r} 2 \\ +8 \\ \hline \end{array}$$

$$\begin{array}{r} 5 \\ +6 \\ \hline \end{array}$$

$$\begin{array}{r} 4 \\ +8 \\ \hline \end{array}$$

$$\begin{array}{r} 6 \\ +9 \\ \hline \end{array}$$

$$\begin{array}{r} 3 \\ +9 \\ \hline \end{array}$$

$$\begin{array}{r} 1 \\ +6 \\ \hline \end{array}$$

$$\begin{array}{r} 6 \\ +1 \\ \hline \end{array}$$

$$\begin{array}{r} 8 \\ +1 \\ \hline \end{array}$$

$$\begin{array}{r} 3 \\ +3 \\ \hline \end{array}$$

$$\begin{array}{r} 5 \\ +3 \\ \hline \end{array}$$

$$\begin{array}{r} 7 \\ +5 \\ \hline \end{array}$$

$$\begin{array}{r} 3 \\ +8 \\ \hline \end{array}$$

$$\begin{array}{r} 3 \\ +1 \\ \hline \end{array}$$

$$\begin{array}{r} 9 \\ +4 \\ \hline \end{array}$$

$$\begin{array}{r} 4 \\ +9 \\ \hline \end{array}$$



Name \_\_\_\_\_

Reteaching

5-2

# Reading and Writing Numbers

Ones	Teens	Tens
1 one	11 eleven	10 ten
2 two	12 twelve	20 twenty
3 three	13 thirteen	30 thirty
4 four	14 fourteen	40 forty
5 five	15 fifteen	50 fifty
6 six	16 sixteen	60 sixty
7 seven	17 seventeen	70 seventy
8 eight	18 eighteen	80 eighty
9 nine	19 nineteen	90 ninety

Write the number.

7 tens and 8 ones is 78.

78 has two **digits**.

Write the number word.

**seventy and eight** is

seventy-eight

Write the number and the number word.

1. 2 tens and 9 ones is \_\_\_\_\_. \_\_\_\_\_

2. 6 tens and 3 ones is \_\_\_\_\_. \_\_\_\_\_

3. 9 tens and 2 ones is \_\_\_\_\_. \_\_\_\_\_

4. 8 tens and 6 ones is \_\_\_\_\_. \_\_\_\_\_

**Number Sense** What is the number?

5. It is greater than 43 and less than 52. If you add the digits, the sum is 8. Write the number word.

\_\_\_\_\_

6. It is less than 60 and greater than 55. If you add the digits, the sum is 13. Write the number.

\_\_\_\_\_

# Reading and Writing Numbers

Write the number.

1. forty-two 42

2. sixty-five \_\_\_\_\_

3. fifteen \_\_\_\_\_

4. fifty-one \_\_\_\_\_

Write the number word.

5. 33 thirty-three

6. 17 \_\_\_\_\_

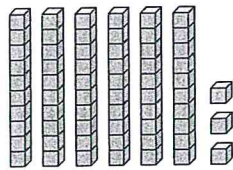
7. 57 \_\_\_\_\_

8. 26 \_\_\_\_\_

9. 48 \_\_\_\_\_

10. 39 \_\_\_\_\_

11. What number do the cubes show?



- (A) ten
- (B) thirty-six
- (C) sixty
- (D) sixty-three

12. **Number Sense** Write the number word to solve the riddle.

I am greater than 4 tens and less than 5 tens. I have 9 ones. What number am I?

\_\_\_\_\_