


Day 12



E-learning

I completed:

_____ The Five a Day page

_____ The Reading Passage and questions

_____ Math Work

_____ Writing

And 1 of the Following:


_____ Music activity

_____ Art activity

_____ P.E. activity

Please bring this completed packet to school when returning after an e-learning day.

NAME _____ DATE _____



What are these people
looking at?

**Draw what they see.
Write what they say**

Name _____

Read the selection. Then answer the questions that follow.

Fox Has Fun

Fox likes to jog. She jogs to town. Then she jogs to the park. As she jogs, she sees bugs. She sees ducks, too. Next, she sees the sun. Then Fox jogs home. At home, she sees Dad. She tells him what she saw. She tells him she had lots of fun. She tells Dad to jog with her. Dad will!

12

Turn the page.

Answer the questions below.

1 Why did Fox jog to town?

- to have fun
- to see Dad
- to get home

2 Where did Fox jog *first*?

- to the park
- to her house
- to the town

3 What did Fox see *first*?

- the ducks
- the bugs
- the sun

4 What did Fox see *right after* she saw ducks?

- the park
- the bugs
- the sun

5 What did Fox do *last*?

2


Name: _____

Partner's Name: _____

Single Digit Addition Tic-Tac-Toe

With a partner, take turns filling in a square by determining the sum. The first person to get three boxes completed in a row, WINS! Hint: have each partner use a different color.

$3+2$ _____	$4+5$ _____	$5+8$ _____
$8+2$ _____	$4+3$ _____	$7+2$ _____
$6+4$ _____	$6+3$ _____	$4+8$ _____



Name _____

Day 1



Addition

1. $2 + 2 =$ _____
2. $3 + 2 =$ _____
3. $2 + 4 =$ _____
4. $0 + 3 =$ _____

Counting

Write the missing numbers.

- 12, _____, 14, _____,
- 16, 17, _____, _____,
- 20, _____, 22, _____

After

Write the number that comes after.

1. 5, _____
2. 9, _____
3. 13, _____

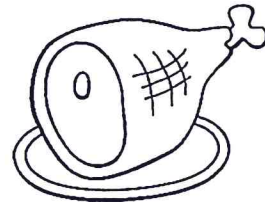
Rhyming

Match the words that rhyme.

- | | |
|-----|-----|
| cat | cut |
| see | sat |
| hut | me |

Phonics

Write the name of the picture.



Sentence Writing

Fix the sentence.

tom and i like to play



Adding 2 single-digit numbers

Grade 1 Addition Worksheet

Find the sums

1) $2 + 4 =$ _____ 8) $8 + 8 =$ _____ 15) $5 + 1 =$ _____

2) $5 + 4 =$ _____ 9) $3 + 4 =$ _____ 16) $1 + 8 =$ _____

3) $3 + 5 =$ _____ 10) $6 + 4 =$ _____ 17) $5 + 8 =$ _____

4) $8 + 2 =$ _____ 11) $3 + 7 =$ _____ 18) $3 + 8 =$ _____

5) $8 + 7 =$ _____ 12) $7 + 3 =$ _____ 19) $5 + 7 =$ _____

6) $5 + 3 =$ _____ 13) $7 + 7 =$ _____ 20) $2 + 3 =$ _____

7) $5 + 5 =$ _____ 14) $9 + 5 =$ _____ 21) $6 + 8 =$ _____