

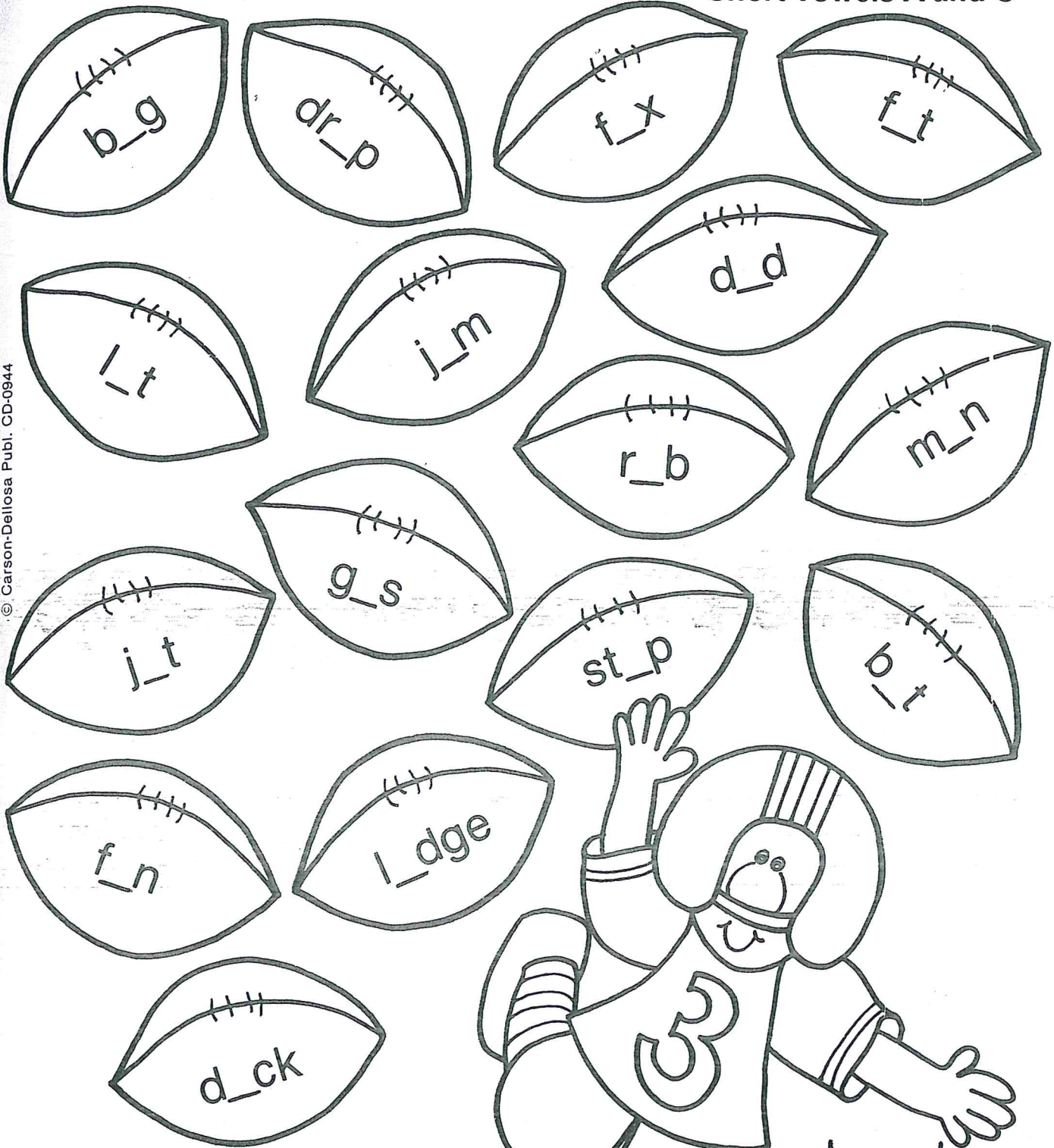
Grade 2 - Day #14 e-Learning Schedule

| | |
|--|--|
| Self-Selected Reading 20 minutes | Students should select a book from home, the library, or their take home reading and read for 20 minutes independently or with an adult. |
| Reading Literature/Informational Text 20 minutes | Complete pages 189 and 227 |
| Writing/Spelling 15 minutes | Write 3 sentences about a great friend or classmate. Be sure to start each sentence with a capital letter and end with punctuation. |
| Math 15 minutes | Complete pages R14.4 and P14.4 |

Total estimated time: 70 minutes

Parent Signature: _____

Short Vowels A and O



© Carson-Dellosa Publ. CD-0944

Read the incomplete words on the footballs. Fill in the vowel a or o to complete each word.

Name _____



Y as a Vowel

Read the words below. Decide if y has a long e sound or a long i sound. Print the words on the correct leaf.

fly candy
my dry
sky happy

long e

long i



try
bunny
sunny

penny
cry
funny

Name _____

This image shows a sheet of primary writing paper. It features ten sets of horizontal lines, each consisting of a solid top line, a dashed middle line, and a solid bottom line. These lines are spaced evenly down the page to help children learn proper letter formation and alignment.

Name _____

Collecting Data Using Tally Marks

The children made tally marks to show the ways children get to school.

| equals 1

count 5 6 7


|||| equals 5

| | | Total |
|------------|--|-------|
| Walk | | 7 |
| School bus | | 10 |

count 5 10

- Color some balloons red. Color the rest blue. Use tally marks to show how many balloons there are in each color. Write the totals.

| | | Total |
|------|--|-------|
| Red | | |
| Blue | | |




Use the tally chart to answer the questions.

- Of which color are there more balloons? _____
- Of which color are there fewer balloons? _____
- How many balloons are there altogether? _____

Name _____




Collecting Data Using Tally Marks

Make tally marks to show how many flowers of each kind there are. Then write each total.



Total

1.

| | | | |
|-------|---|--|--|
| Rose |  | | |
| Tulip |  | | |
| Daisy |  | | |

Use your tally to answer the questions.

2. Which kind of flower is there the most of? _____

3. How many daisies and roses are there in all? _____

Algebra

4. How many more daisies than tulips are there?

- (A) 2
- (B) 3
- (C) 5
- (D) 7

Reasoning

5. How many roses and tulips are there in all?

- (A) 15
- (B) 13
- (C) 12
- (D) 3