

Grade 3
day 5

Sam's Helicopter Ride



Photo Credit: Tony Hisgett

Sam and his father went to an airport.

"Those helicopters are cool!" Sam said.

"Helicopters can land in small places," said his father.

"They can also fly side to side."

A man came over.

"I can take you for a ride in one," he said.

Sam and his father buckled up. The blades on top of the helicopter spun around. Whirr! Whirr! The blades made a big sound.

The helicopter shook. Then up they went. Sam looked down at his town. It was a great ride!

Name: _____ Date: _____

Directions: For questions 1-4, circle the correct answer.

1. Where did Sam and his father go?

- a) to the toy store
- b) to an airport
- c) to a hospital

2. Who tells Sam that helicopters can land in small places?

- a) Sam's father
- b) the man at the airport
- c) Sam's friend

3. Read these sentences from the story: "The blades on top of the helicopter spun around. Whirr! Whirr! The blades made a big sound. The helicopter shook."

Based on the story, what most likely made the helicopter shake?


- a) Sam and his father
- b) an earthquake at the airport
- c) the spinning blades on top of the helicopter

4. What is "Sam's Helicopter Ride" mostly about?

- a) parts of a helicopter
- b) Sam's helicopter ride
- c) Sam's trip to the airport

5. A) What do Sam and his father get to do with the man from the airport?

B) Draw a picture of Sam and his father on their helicopter ride.



6. What did you learn from "Sam's Helicopter Ride"?

7. **Class Discussion Question:** Where were Sam and his father when they buckled up in the middle of the passage?

Grade 3 day 5


Name _____

Handwriting practice lines consisting of multiple sets of three horizontal lines: a solid top line, a dashed middle line, and a solid bottom line.


Place Value *Grade 3 day 5*

Name: _____



Directions: Match the place value blocks to the correct number.




133





125





141



116



109



171



Name: _____

Place Value: Tens

Directions: Organize the numbers below in to the proper groups.

1,358

472

205

5,350

381

29

931

8,902

4,386

922

657

10,239

874

929

670

503

5,688

230

150

38

These numbers have a 5 in
the tens place.

These numbers have a 7 in
the tens place.

These numbers have a 3 in
the tens place.

These numbers have a 0 in
the tens place.

These numbers have a 8 in
the tens place.

These numbers have a 2 in
the tens place.