


Day 7



E-learning Packet

I completed:

_____ The Five a Day page

_____ The Reading Passage and questions

_____ Math Work

_____ Writing

And 1 of the Following:

_____ Music activity

_____ Art activity

_____ P.E. activity

Please bring this completed packet to school when returning after an e-learning day.

NAME _____ DATE _____

Name _____

Read the selection. Then answer the questions that follow.

Nice People

7

Kim came into my class late in the fall. No one said much to her. Then at lunch Jan sat with Kim. Kim was glad. Jan gave grapes to Kim. Kim gave cake to Jan. Then they were pals.

When Jeff came to class, Kim was nice to him. She said, "We can all sit together at lunch."

Turn the page.

Answer the questions below.

1 Why did Jan give grapes to Kim?

- She wanted to be nice to Kim.
- She had too many grapes.
- She wanted to eat cake.

2 What happened *first*?

- Jeff came to class.
- Jan spoke to Kim.
- Kim came to class.

3 What happened *after* the girls had lunch?

- Kim sat down with Jan.
- They got to be good friends.
- Jan went to a new school.

4 What happened *last*?

- Kim sat with Jan.
- Kim spoke to Jeff.
- Jeff came to class.

5 What happened *after* Jan gave Kim grapes?

Name _____

Day 7

Word Problem

Jenna ate 9 grapes and Daniel ate 15 grapes. How many more grapes did Daniel eat than Jenna?

_____ grapes

Verbs

Circle the verb or verbs in each sentence. Verbs show action.

1. We hiked 5 miles and then sat around the campfire. (2)
2. We slept in tents. (1)

Mental Math

1. What is 10 less than 15? _____
2. What is 10 more than 64? _____
3. What is 10 less than 97? _____
4. What is 10 more than 38? _____

Time

Write the time.



Synonyms

Write a synonym for each word.

giggle _____

silly _____

little _____

Possessive Nouns

Write the possessive noun to complete each sentence. Add 's to the word in bold.

1. Daniel owns a dirt bike. It is _____ dirt bike.
2. My dad owns that horse. It is _____ horse.

Level B 5+6
Practice Page A

Name _____

$$\begin{array}{r} 9 \\ + 4 \\ \hline \end{array}$$

$$\begin{array}{r} 9 \\ + 2 \\ \hline \end{array}$$

$$\begin{array}{r} 6 \\ + 5 \\ \hline \end{array}$$

$$\begin{array}{r} 4 \\ + 8 \\ \hline \end{array}$$

$$\begin{array}{r} 5 \\ + 6 \\ \hline \end{array}$$

$$\begin{array}{r} 3 \\ + 7 \\ \hline \end{array}$$

$$\begin{array}{r} 5 \\ + 6 \\ \hline \end{array}$$

$$\begin{array}{r} 4 \\ + 9 \\ \hline \end{array}$$

$$\begin{array}{r} 6 \\ + 5 \\ \hline \end{array}$$

$$\begin{array}{r} 5 \\ + 3 \\ \hline \end{array}$$

$$\begin{array}{r} 5 \\ + 6 \\ \hline \end{array}$$

$$\begin{array}{r} 6 \\ + 4 \\ \hline \end{array}$$

$$\begin{array}{r} 6 \\ + 5 \\ \hline \end{array}$$

$$\begin{array}{r} 3 \\ + 3 \\ \hline \end{array}$$

$$\begin{array}{r} 9 \\ + 4 \\ \hline \end{array}$$

$$\begin{array}{r} 3 \\ + 8 \\ \hline \end{array}$$

$$\begin{array}{r} 6 \\ + 5 \\ \hline \end{array}$$

$$\begin{array}{r} 4 \\ + 3 \\ \hline \end{array}$$

$$\begin{array}{r} 4 \\ + 9 \\ \hline \end{array}$$

$$\begin{array}{r} 5 \\ + 6 \\ \hline \end{array}$$

$$\begin{array}{r} 5 \\ + 6 \\ \hline \end{array}$$

$$\begin{array}{r} 9 \\ + 4 \\ \hline \end{array}$$

$$\begin{array}{r} 3 \\ + 6 \\ \hline \end{array}$$

$$\begin{array}{r} 6 \\ + 5 \\ \hline \end{array}$$

$$\begin{array}{r} 4 \\ + 5 \\ \hline \end{array}$$

$$\begin{array}{r} 4 \\ + 9 \\ \hline \end{array}$$

$$\begin{array}{r} 4 \\ + 7 \\ \hline \end{array}$$


$$\begin{array}{r} 6 \\ + 5 \\ \hline \end{array}$$

$$\begin{array}{r} 9 \\ + 3 \\ \hline \end{array}$$

$$\begin{array}{r} 5 \\ + 6 \\ \hline \end{array}$$

Lift-off

Count by tens.
Connect the dots from 10 to 100.
Begin at the ☆.



Count by tens. Write the missing numbers.

10, 20, _____, _____, 50, _____, _____, _____, 90, _____


Daily Word Problems

Wednesday - Week 18

Name: _____

7

Four cows waited in the pasture.
Seven cows waited in the pen.
Two cows waited by the barn.
How many cows were waiting?



Write a number sentence here.

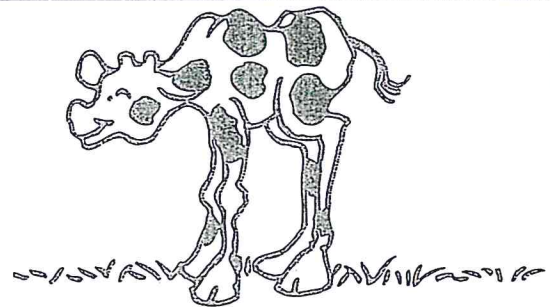
_____ COWS

Daily Word Problems

Thursday - Week 18

Name: _____

Each of Farmer Gold's cows has a calf.
If he has twenty cows, how many
calves does he have?
How many cattle does he have in all?



Write a number sentence here.

_____ calves

_____ cattle

7

Home Sweet Home

Name _____

