


# Day 8



## E-learning Packet

I completed:

\_\_\_\_\_ The Five a Day page

\_\_\_\_\_ The Reading Passage and questions

\_\_\_\_\_ Math Work

\_\_\_\_\_ Writing

And 1 of the Following:

\_\_\_\_\_ Music activity

\_\_\_\_\_ Art activity

\_\_\_\_\_ P.E. activity

Please bring this completed packet to school when returning after an e-learning day.

NAME \_\_\_\_\_ DATE \_\_\_\_\_

Name \_\_\_\_\_

Read the selection. Then answer the questions that follow.

### My Brave Mom

My mom has a good job. Her job is to put out fires. She puts on a big black hat with a wide brim for her job. She drives a red truck. She helps people in the neighborhood. She is brave. I am glad when she comes home safe. When I grow up, I want to put out fires too.

8

Turn the page.



Answer the questions below.

1 Why does the author want to put out fires?

- He wants to be like his mom.
- He likes to put on black hats.
- He wants to ride in red trucks.

2 Why did the author write this story?

- to tell about a red truck
- to tell about his mom
- to tell about his neighborhood

3 Why does Mom put on a hat?

- to get help
- to look good
- to be safe

4 Why did the author tell about Mom's hat?

- to tell when it will rain
- to tell where she lives
- to tell what she looks like

5 Why does the author think his mom is brave?

---

---

---

---

---

---

---

---

1 Copyright © Pearson Education, Inc., or its affiliates. All Rights Reserved.

Name \_\_\_\_\_


Day 41

## Subtraction

- $12 - 7 =$  \_\_\_\_\_
- $14 - 8 =$  \_\_\_\_\_
- $10 - 6 =$  \_\_\_\_\_
- $13 - 5 =$  \_\_\_\_\_

## Digraphs

Color the pictures that begin with the **ch** sound.



## Syllables

Write the number of syllables for each word.

- jumped \_\_\_\_\_
- walking \_\_\_\_\_
- watch \_\_\_\_\_


## Capitalization

Circle the words that need a capital letter.

- there is no school on monday.
- my cat's name is fluffy.

## Graphing

Mason recorded the number of farm animals he saw  
Use the bar graph to answer the questions.



Which animal did he see the least?

\_\_\_\_\_

How many cows did he see?

\_\_\_\_\_

Level B 4+8  
Practice Page A

(8)

Name \_\_\_\_\_

$$\begin{array}{r} 7 \\ + 4 \\ \hline \end{array}$$

$$\begin{array}{r} 5 \\ + 3 \\ \hline \end{array}$$

$$\begin{array}{r} 8 \\ + 4 \\ \hline \end{array}$$

$$\begin{array}{r} 9 \\ + 2 \\ \hline \end{array}$$

$$\begin{array}{r} 4 \\ + 8 \\ \hline \end{array}$$

$$\begin{array}{r} 4 \\ + 4 \\ \hline \end{array}$$

$$\begin{array}{r} 4 \\ + 8 \\ \hline \end{array}$$

$$\begin{array}{r} 4 \\ + 7 \\ \hline \end{array}$$

$$\begin{array}{r} 8 \\ + 4 \\ \hline \end{array}$$

$$\begin{array}{r} 9 \\ + 3 \\ \hline \end{array}$$

$$\begin{array}{r} 8 \\ + 4 \\ \hline \end{array}$$

$$\begin{array}{r} 3 \\ + 7 \\ \hline \end{array}$$

$$\begin{array}{r} 4 \\ + 8 \\ \hline \end{array}$$

$$\begin{array}{r} 4 \\ + 5 \\ \hline \end{array}$$

$$\begin{array}{r} 7 \\ + 4 \\ \hline \end{array}$$

$$\begin{array}{r} 6 \\ + 3 \\ \hline \end{array}$$

$$\begin{array}{r} 4 \\ + 8 \\ \hline \end{array}$$

$$\begin{array}{r} 5 \\ + 5 \\ \hline \end{array}$$

$$\begin{array}{r} 4 \\ + 7 \\ \hline \end{array}$$

$$\begin{array}{r} 8 \\ + 4 \\ \hline \end{array}$$

$$\begin{array}{r} 8 \\ + 4 \\ \hline \end{array}$$

$$\begin{array}{r} 3 \\ + 8 \\ \hline \end{array}$$

$$\begin{array}{r} 7 \\ + 4 \\ \hline \end{array}$$

$$\begin{array}{r} 4 \\ + 8 \\ \hline \end{array}$$

$$\begin{array}{r} 2 \\ + 8 \\ \hline \end{array}$$

$$\begin{array}{r} 4 \\ + 7 \\ \hline \end{array}$$

$$\begin{array}{r} 6 \\ + 4 \\ \hline \end{array}$$


$$\begin{array}{r} 4 \\ + 8 \\ \hline \end{array}$$

$$\begin{array}{r} 4 \\ + 3 \\ \hline \end{array}$$

$$\begin{array}{r} 8 \\ + 4 \\ \hline \end{array}$$


8

# Number Patterns



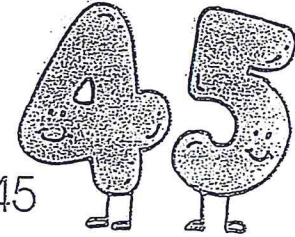
Find the number pattern.  
Write the missing numbers.

A. 43, 44, \_\_\_\_\_, 46, 47, 48, \_\_\_\_\_, \_\_\_\_\_, 51



B. 99, 98, 97, \_\_\_\_\_, 95, 94, \_\_\_\_\_, \_\_\_\_\_, 91

C. 10, 20, \_\_\_\_\_, 40, 50, \_\_\_\_\_, 70, \_\_\_\_\_, 90



D. 5, 10, 15, \_\_\_\_\_, \_\_\_\_\_, 30, \_\_\_\_\_, \_\_\_\_\_, 45

E. 75, 70, 65, \_\_\_\_\_, 55, 50, \_\_\_\_\_, \_\_\_\_\_, \_\_\_\_\_




F. 2, 4, 6, \_\_\_\_\_, 10, \_\_\_\_\_, 14, \_\_\_\_\_, \_\_\_\_\_, 20

G. 1, 3, \_\_\_\_\_, \_\_\_\_\_, 9, 11, 13, 15, \_\_\_\_\_, \_\_\_\_\_, 21

H. 11, \_\_\_\_\_, 31, 41, 51, \_\_\_\_\_, 71, \_\_\_\_\_, 91, 101


I. 80, 70, \_\_\_\_\_, \_\_\_\_\_, 40, \_\_\_\_\_, \_\_\_\_\_, 10

J. 30, 28, 26, 24, \_\_\_\_\_, 20, 18, \_\_\_\_\_, \_\_\_\_\_, 12



There is a group of 10 walruses on the beach.

How many different combinations of adults and babies could there be in the group?



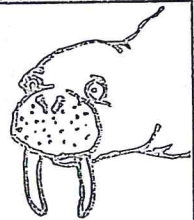
adults



babies

## Facts About Walruses

- A walrus can have as many as 700 whiskers on its snout.
- A walrus uses its big tusks to climb out of the water onto ice.
- The tusks anchor it on the ocean bottom while it digs for clams.
- The walrus squirts high-power jets of water out of its mouth.
- These water jets drill into the mud and uncover clams.



8

# Animal Antics

Name \_\_\_\_\_



---

---

---

---

---

---

---

---

---

---