

3 Name _____

Addition with 3 addends

It's a Triple Play!

Help Coach Crocodile number the shirts.

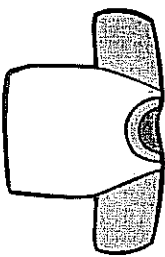
Cut along the dotted lines.

Use the baseballs to find each sum.

Write the sums.

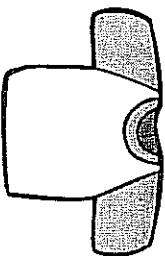
1.

$$\begin{array}{r} 2 \\ 2 \\ + 1 \\ \hline \end{array}$$



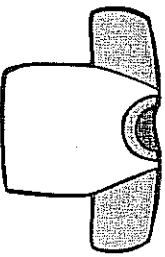
2.

$$\begin{array}{r} 3 \\ 1 \\ + 4 \\ \hline \end{array}$$



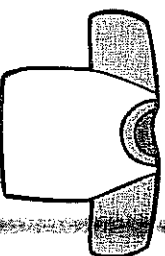
3.

$$\begin{array}{r} 7 \\ 2 \\ + 3 \\ \hline \end{array}$$



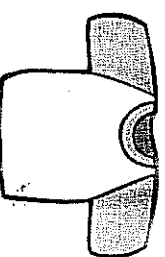
4.

$$\begin{array}{r} 1 \\ 6 \\ + 4 \\ \hline \end{array}$$



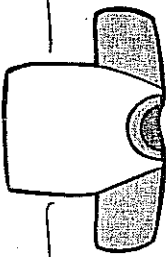
5.

$$\begin{array}{r} 6 \\ 3 \\ + 3 \\ \hline \end{array}$$



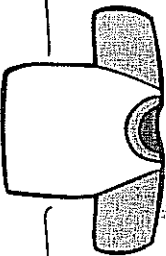
6.

$$\begin{array}{r} 5 \\ 1 \\ + 2 \\ \hline \end{array}$$



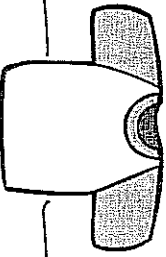
7.

$$\begin{array}{r} 4 \\ 4 \\ + 1 \\ \hline \end{array}$$




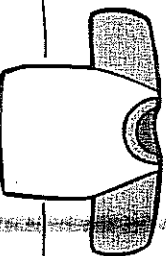
8.

$$\begin{array}{r} 3 \\ 5 \\ + 3 \\ \hline \end{array}$$



9.

$$\begin{array}{r} 4 \\ 5 \\ + 1 \\ \hline \end{array}$$



Bonus Box: There are 8 baseballs on the ground, 2 baseballs in the school, and 1 baseball on the bus. On the back of this sheet, write 2 different number sentences to show how many baseballs there are in all.

