

4th Grade

Day 8

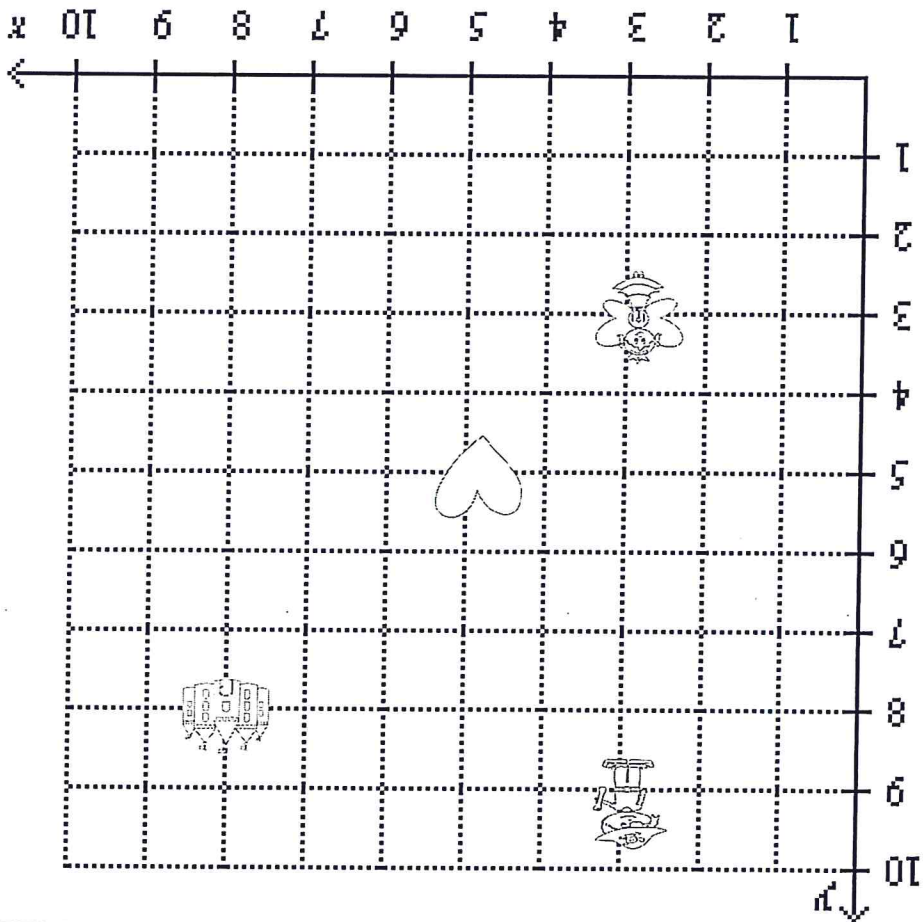
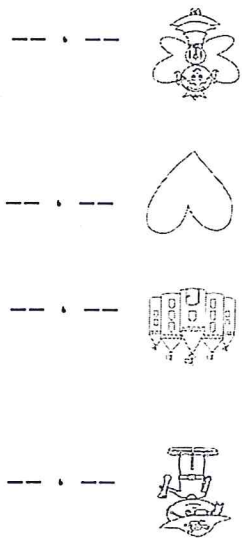
Math Assessment

5.G.1

Date: _____

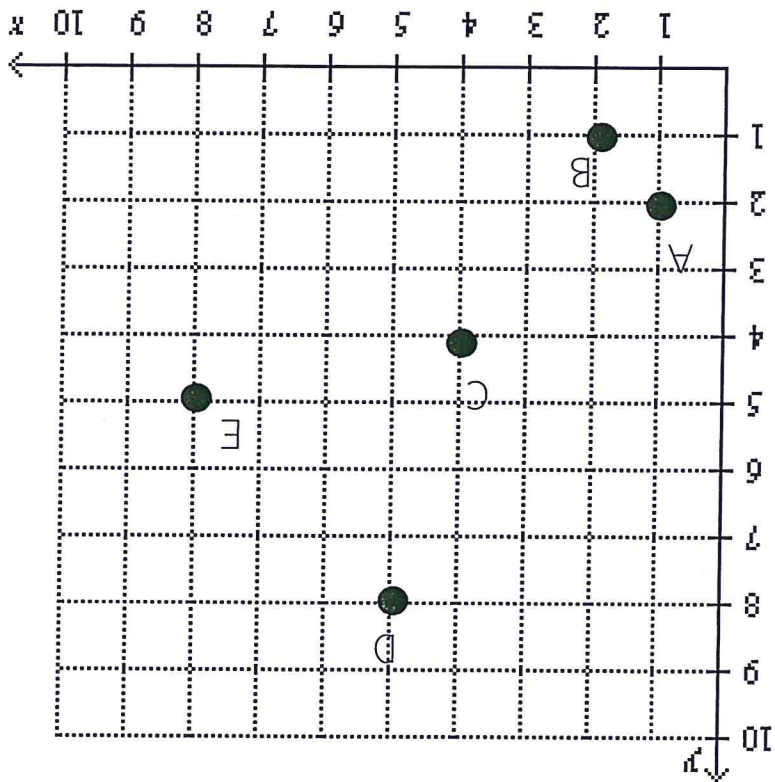
Name: _____

Tell the coordinates for each image.



Tell which letter can be found at the coordinate pair.

- 8.5
- 5.8
- 4.4
- 1.2
- 2.1





How much more money does Keith need to complete his purchase?

10) For bowling season, Keith decided to buy a ball for \$7.30, new shorts for \$25.20, as well as a pair of bowling shoes for \$45.00. Keith currently has \$23.70, and a coupon for \$11.00 off his purchase.

second. In total, how many blocks did Sally use for all 3 stacks?

9) Sally made 3 different stacks of wooden blocks. The first stack was 8 blocks high, the second stack was 2 block(s) higher than the first, and the final stack was 8 block(s) higher than the

her dog. If the outfit costs \$193.60, how much money does Sara still need to save?

8) Sara wanted to save money to buy a new outfit. Sara saved \$21.00 in June, \$28.10 in July and \$22.30 in August. However, she also had to spend \$15.80 on school supplies and \$42.50 on

mocha cupcakes. How many more cupcakes does Mike need to make?

7) Mike wants 156 cupcakes for his party. Mike has already made 24 cherry cupcakes, and 60

6 of them on a ride. How many more tickets does he need?

6) At an amusement park, Mike wants to ride a rollercoaster that costs 19 tickets, a bumper car that costs 35 tickets, and a merry-go-round that costs 23 tickets. Mike had 18 tickets, but lost

many gold plates should he get?

5) Jason wants several different color plates for his birthday. Jason wants to get 132 orange plates, 144 green plates, and some amount of gold plates. In total, Jason wants 348 plates, so how

and an additional 27 stickers to Jason. How many stickers does Benny still have?

4) Benny had 140 bear stickers. Benny gave 34 stickers to Mike, 20 stickers to his sister

already walked 12 blocks, how many more blocks must he walk before arriving at school?

3) Before getting to school, Jason has a few errands to run. Jason has to walk 7 blocks to the museum, and 4 blocks to the theater, before walking the final 10 blocks to arrive at school. If Jason has

into her piggybank. How many coins does Sara have in her piggybank?

2) Sara likes to collect coins. Sara got 17 coins from her brother, 18 coins from her mother, as well as 27 coins from Jason. However, Sara lost 34 coins before putting those coins

change should Jason receive?

1) For lunch, Jason bought a glass of juice for \$1.60, a turkey sandwich for \$4.70, as well as some brownies for \$2.20. The tax came out to \$1.00, and Jason paid with \$14.00. How much

Word Problems

Teacher : _____

Name : _____

Date : _____

Score : _____




Parallel, Perpendicular, and Intersecting Lines


10

11

12

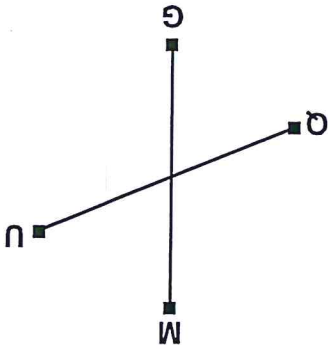


13



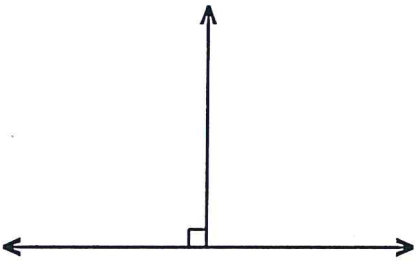
14

15



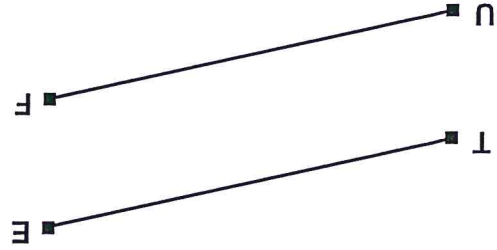
16

17




18

19



20

21



22

$$3 \overline{)170}$$

$$7 \overline{)446}$$

$$2 \overline{)185}$$

$$6 \overline{)598}$$

$$9 \overline{)679}$$

$$4 \overline{)41}$$

$$6 \overline{)527}$$

$$2 \overline{)23}$$

$$5 \overline{)209}$$

$$6 \overline{)423}$$

$$7 \overline{)550}$$

$$3 \overline{)31}$$

$$5 \overline{)229}$$

$$5 \overline{)497}$$

$$4 \overline{)205}$$

$$8 \overline{)526}$$

$$4 \overline{)317}$$

$$7 \overline{)367}$$

$$3 \overline{)127}$$

$$8 \overline{)563}$$

Name : _____
Teacher : _____

Score : _____
Date : _____



$$\begin{array}{r} 50.218 \\ - 12.839 \\ \hline \end{array}$$

$$\begin{array}{r} 86.447 \\ - 18.348 \\ \hline \end{array}$$

$$\begin{array}{r} 65.381 \\ - 46.964 \\ \hline \end{array}$$

$$\begin{array}{r} 92.479 \\ - 85.823 \\ \hline \end{array}$$

$$\begin{array}{r} 28.733 \\ - 19.674 \\ \hline \end{array}$$

$$\begin{array}{r} 43.466 \\ - 27.559 \\ \hline \end{array}$$

$$\begin{array}{r} 67.762 \\ - 32.223 \\ \hline \end{array}$$

$$\begin{array}{r} 76.893 \\ - 53.475 \\ \hline \end{array}$$

$$\begin{array}{r} 96.244 \\ - 24.526 \\ \hline \end{array}$$

$$\begin{array}{r} 85.675 \\ - 19.126 \\ \hline \end{array}$$

$$\begin{array}{r} 91.222 \\ - 43.729 \\ \hline \end{array}$$

$$\begin{array}{r} 90.177 \\ - 65.217 \\ \hline \end{array}$$

$$\begin{array}{r} 76.186 \\ - 35.975 \\ \hline \end{array}$$

$$\begin{array}{r} 85.758 \\ - 46.497 \\ \hline \end{array}$$

$$\begin{array}{r} 66.854 \\ - 12.899 \\ \hline \end{array}$$

$$\begin{array}{r} 80.395 \\ - 41.642 \\ \hline \end{array}$$

$$\begin{array}{r} 92.719 \\ - 85.573 \\ \hline \end{array}$$

$$\begin{array}{r} 19.434 \\ - 19.285 \\ \hline \end{array}$$

$$\begin{array}{r} 91.157 \\ - 89.237 \\ \hline \end{array}$$

$$\begin{array}{r} 90.869 \\ - 35.326 \\ \hline \end{array}$$

$$\begin{array}{r} 97.211 \\ - 67.486 \\ \hline \end{array}$$

$$\begin{array}{r} 84.633 \\ - 10.335 \\ \hline \end{array}$$

$$\begin{array}{r} 71.899 \\ - 47.916 \\ \hline \end{array}$$

$$\begin{array}{r} 95.865 \\ - 10.747 \\ \hline \end{array}$$

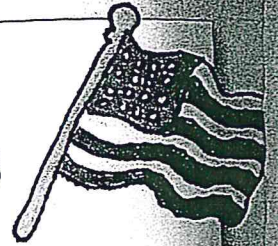

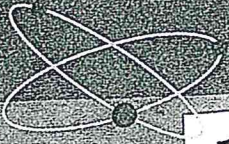
$$\begin{array}{r} 89.487 \\ - 79.237 \\ \hline \end{array}$$

Name :

Teacher :

Score :

Date :



The Three Branches of Government

The U.S.A. has three branches of government: the Executive Branch, the Legislative Branch, and the Judicial Branch. Each branch holds equal but separate power so that there is a system of checks and balances.

Executive Branch



The Executive Branch is headed by the president and includes the vice-president, and the 15 presidential advisors that make up the Cabinet. The main job of the Executive Branch is to protect and serve the citizens of the United States by enforcing the laws.

Legislative Branch

The Legislative Branch is headed by Congress. Its job is to create the laws that govern the people. Congress is made up of two parts: the Senate and the House of Representatives. Both the Senate and the House are made up of leaders from every state who have been elected by the people of the states they represent. The Senate has 100 senators: two for every state—no matter how big or small the state. In the House of Representatives, the number of members per state varies according to state population. A state with a large population has more representatives than a state with a small population.

Judicial Branch

The third branch of government is the Judicial Branch. This branch is responsible for interpreting the laws of the Constitution to make sure everyone is being treated fairly. The Supreme Court of the Judicial Branch is the highest court in the U.S., and everyone—even the president!—must accept its rulings.



Name the three branches of government.

Why does the government have three branches of government instead of one?


Who is in charge of the Executive Branch?

Which two legislative groups make up Congress?

How many senators are in the Senate? How many senators does each state have?

Would a state with a small population have more representatives than a state with a larger population? Why?

What is the highest court in the United States?



13-507-024 Proper Nouns

Proper nouns name specific people, places, and things. In a sentence, the noun is the person, place, or thing that can act or be talked about.

Dr. Bateman – a specific person
Dr. Bateman helped our sick puppy.

Anchorage – a specific place
Anchorage is a city in Alaska.


Empire State Building – a specific thing
 The *Empire State Building* is in New York City.

Solve It

Write the correct words from the box to complete Patrick's journal entry. Use only proper nouns.

Uncle Rich	Principal Ron	my principal	planet
my school	tomorrow	<u>The Lord of the Rings</u>	national park
Grand Canyon	Venus	the playground	my uncle
book	Saturday	Highland Park	Pierce School

I love _____ mornings. I go to
 _____ to walk the trails and read
 _____. Later, Aunt Pat and
 _____ come to my house. We plan
 our trip to the _____. We use the
 telescope to look at _____ when it
 gets dark. On Monday, it's back to
 _____. I like _____.
 He is a good principal. But I still look forward to the
 weekend.



Lesson 1**Common Nouns****Match It**

Draw a line from Column A to Column B to match nouns. Practice it again by drawing lines from Column C to Column D.

Column A

person
place
thing

Column C


person
place
thing

Column B

key
police officer
country

Column D

student
gate
library

**Try It**

Write a short paragraph telling about a place you have visited. Use at least six common nouns.

Lesson 1 Common Nouns

Common nouns name people, places, and things. They are general nouns (not specific).

veterinarian - a person

A *veterinarian* is a doctor who helps animals.

city - a place

The *city* is in the southeastern part of the state.

shoe - a thing

My *shoe* is stuck in the mud.

Complete It

Use the words from the box below to complete the following sentences.

aunt	firefighters	park	sailors	trees
books	flowers	post office	telephone	track

- The _____ look pretty in the vase.
- The _____ rang and rang.
- My _____ is visiting from Colorado.
- The students run on the _____ beside the school.
- _____ must not be afraid of smoke and fire.
- The _____ is a nice place to play.
- _____ on many subjects can be found in the library.
- _____ must like living on the sea.
- The _____ sells stamps.
- Many _____ grow in this forrest.

